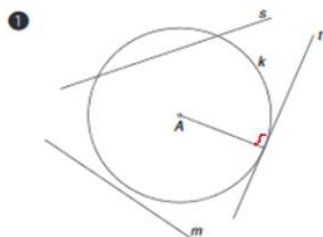


**Krožnica in premica vaje**

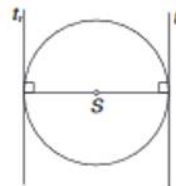
1. Reši naloge 1, 2, 3, 4 in 7 v učbeniku na strani 193.
2. Vstavi pojme : polmer, premer, dotikalnica, mimobežnica, tetiva.

a	<input type="text"/>
b	<input type="text"/>
c	<input type="text"/>
d	<input type="text"/>
e	<input type="text"/>

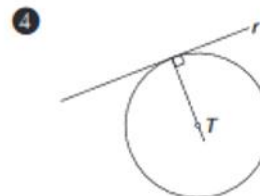
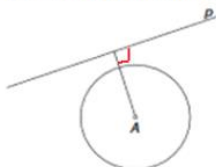
Rešitve.



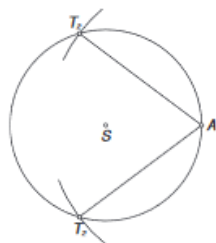
3 tangenti sta vzporedni



2 premica p je mimobežnica



7 dve rešitvi



a	tetiva
b	mimobežnica
c	polmer
d	premer
e	dotikalnica