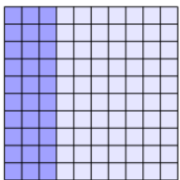







Odstotki vaje

1.Zapiši obarvani del celote z okrajšanim ulomkom, odstotkom in decimalnim številom.

a)	b)	c)
		
		

2.Ulomke zapiši z odstotki in decimalnimi števili.

$$\frac{2}{5} =$$

$$\frac{9}{10} =$$

$$\frac{48}{100} =$$

$$\frac{7}{2} =$$

$$\frac{1}{8} =$$

$$\frac{1}{3} =$$

$$\frac{7}{6} =$$

3. Decimalno število zapiši z odstotki.

$$0,17 =$$

$$1,32 =$$






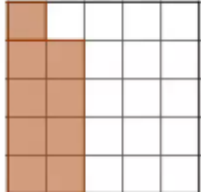
$$0,08 =$$

$$0,054 =$$

$$0,006 =$$

Rešitve

1.

		
$\frac{30}{100} = \frac{3}{10} = 30\% = 0,30 = 0,3$	$\frac{25}{100} = \frac{1}{4} = 25\% = 0,25$	$\frac{40}{100} = \frac{2}{5} = 40\% = 0,4$
		
$\frac{1}{100} = 1\% = 0,01$	$\frac{100}{100} = 100\% = 1$	$\frac{9}{25} = \frac{36}{100} = 36\% = 0,36$

2.

Ulomke zapiši z odstotki in decimalnimi števili.

$$\frac{2}{5} = \frac{40}{100} = 40\% = 0,4$$

$$\frac{9}{10} = \frac{90}{100} = 90\% = 0,9$$

$$\frac{48}{300} = \frac{16}{100} = 16\% = 0,16$$

$$\frac{7}{2} = \frac{350}{100} = 350\% = 3,5$$

$$\frac{1}{8} = \frac{125}{1000} = 12,5\% = 0,125$$

$$\frac{1}{3} = 1 : 3 = 0,3333 \dots = 0,33 = 33\%$$

$$\frac{7}{6} = 7 : 6 = 1,1666 \dots = 1,66 = 166\%$$

3.

Decimalno število zapiši z odstotki.

$$\begin{aligned}0,17 &= 17 \% \\1,32 &= 132 \% \\0,08 &= 8 \% \\0,054 &= 5,4 \% \\0,006 &= 0,6\% \text{ ali } 6 \text{ ‰}\end{aligned}$$

Zapomni si!

$$100\% = 1 \quad (\text{celota})$$

$$50\% = \frac{1}{2} = 0,5$$

$$25\% = \frac{1}{4} = 0,25$$

$$75\% = \frac{3}{4} = 0,75$$